

100% Money Back
Guarantee

Vendor:ASVAB

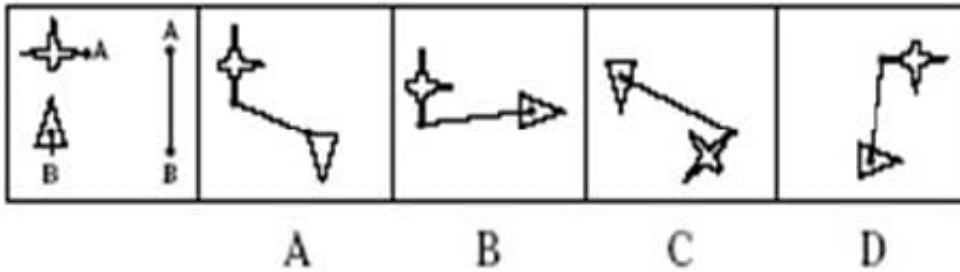
Exam Code:ASVAB-SECTION-9

Exam Name:ASVAB Section Nine : Assembling
Objects

Version:Demo

QUESTION 1

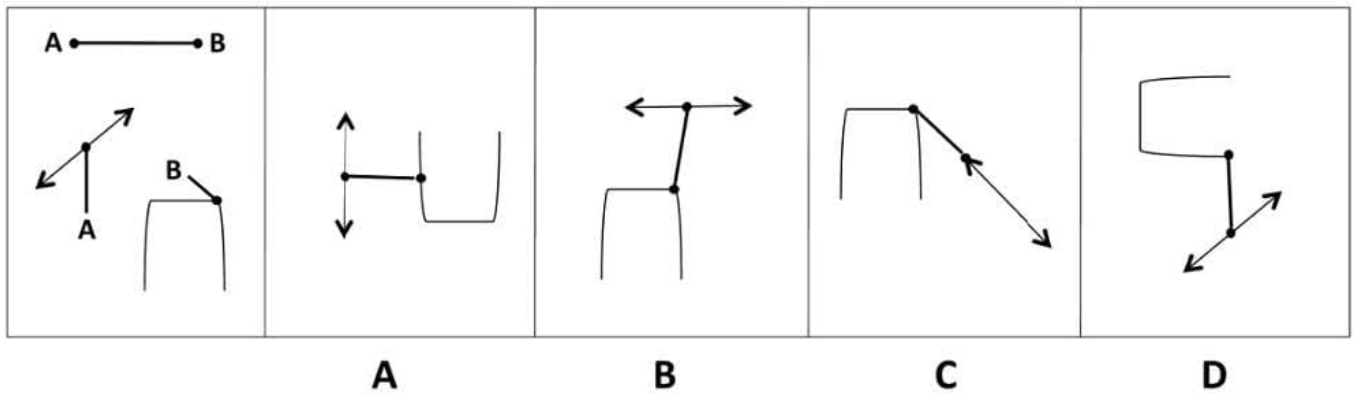
Determine which of the choices best solves the problem shown in the first picture. The problem is presented in the first drawing and the remaining four drawings are possible solutions.



- A. Option A
- B. Option B
- C. Option C
- D. Option D

Correct Answer: B

QUESTION 2

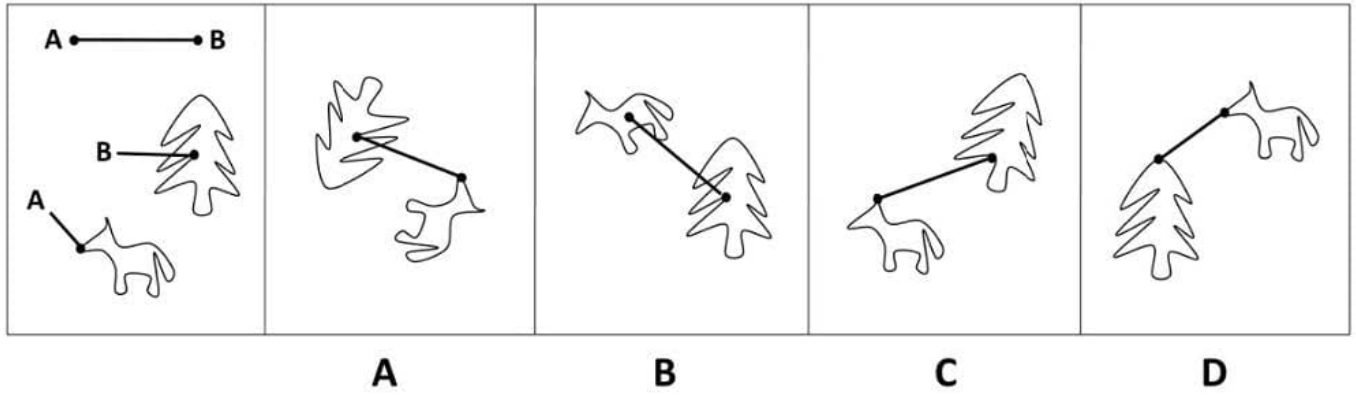


- A. Option A
- B. Option B
- C. Option C
- D. Option D

Correct Answer: B

QUESTION 3

Which of these images best solves the problem in the first picture?



A. Option A

B. Option B

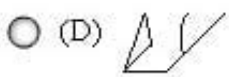
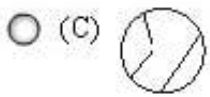
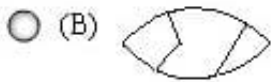
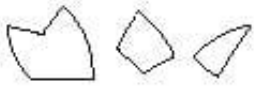
C. Option C

D. Option D

Correct Answer: A

QUESTION 4

Determine which of the choices best solves the problem shown in the first picture. The problem is presented in the first drawing and the remaining four drawings are possible solutions.



A. Option A

B. Option B

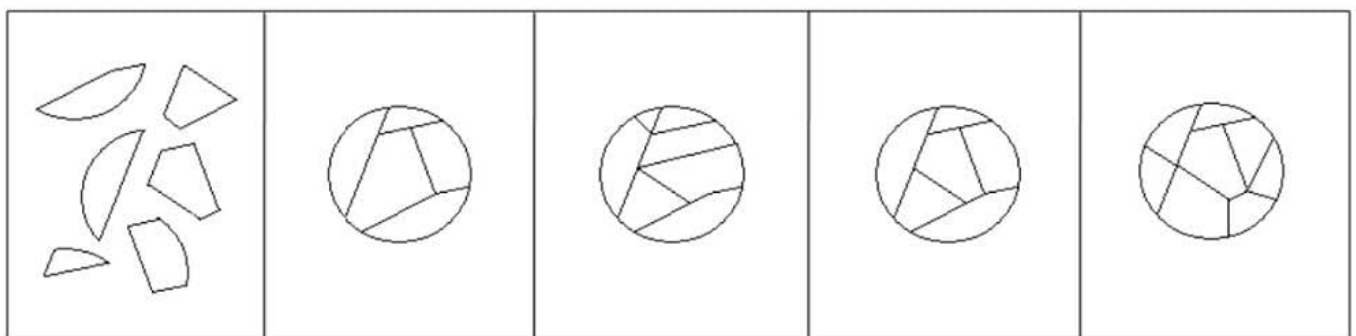
C. Option C

D. Option D

Correct Answer: B

QUESTION 5

Which of these images best solves the problem in the first picture?



A

B

C

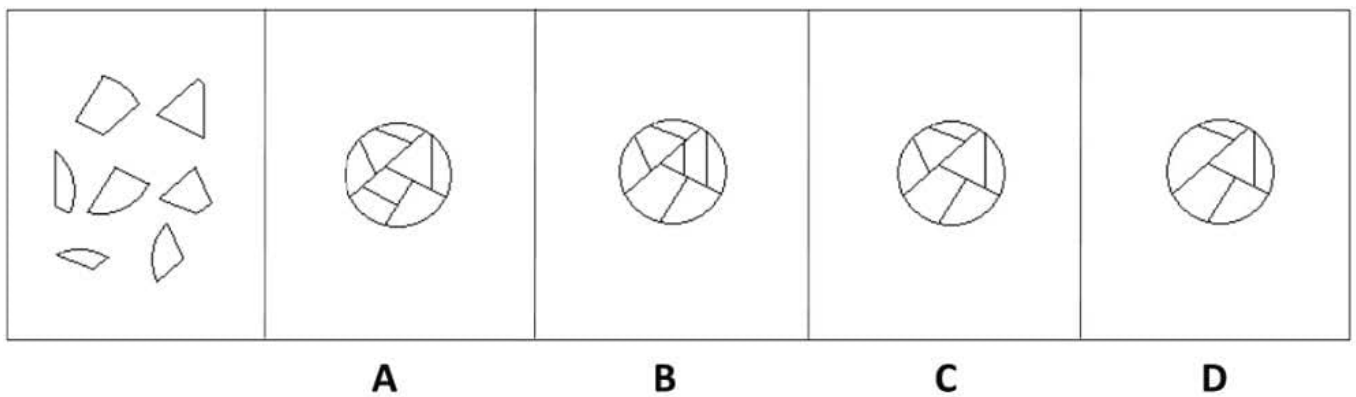
D

- A. Option A
- B. Option B
- C. Option C
- D. Option D

Correct Answer: C

QUESTION 6

Which of these images best solves the problem in the first picture?

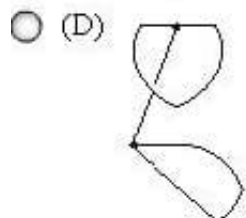
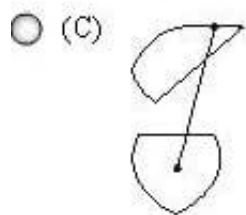
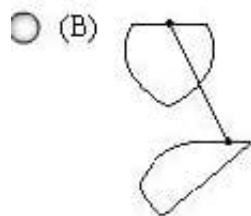
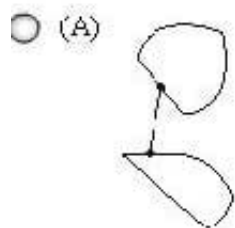
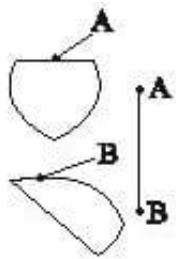


- A. Option A
- B. Option B
- C. Option C
- D. Option D

Correct Answer: C

QUESTION 7

Determine which of the choices best solves the problem shown in the first picture. The problem is presented in the first drawing and the remaining four drawings are possible solutions.



A. Option A

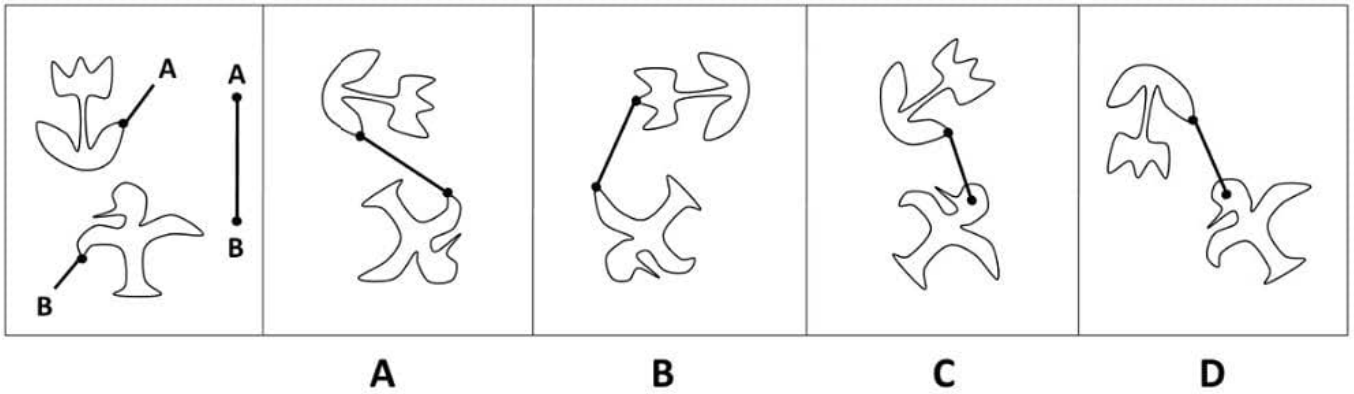
B. Option B

C. Option C

D. Option D

Correct Answer: A

QUESTION 8



A. Option A

B. Option B

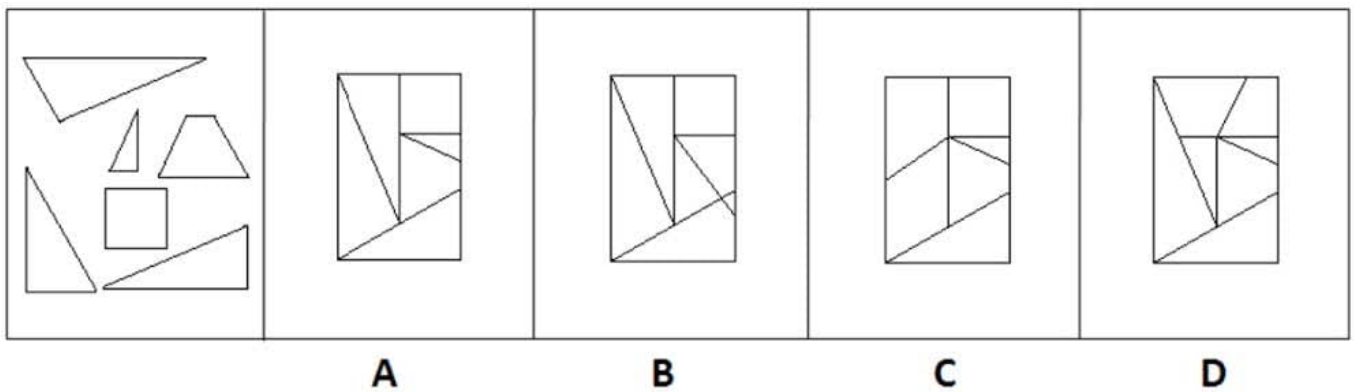
C. Option C

D. Option D

Correct Answer: A

QUESTION 9

Which of these images best solves the problem in the first picture?



A. Option A

B. Option B

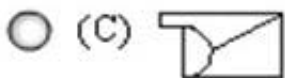
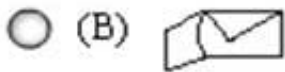
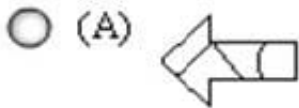
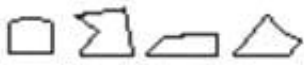
C. Option C

D. Option D

Correct Answer: A

QUESTION 10

Determine which of the choices best solves the problem shown in the first picture. The problem is presented in the first drawing and the remaining four drawings are possible solutions.



A. Option A

B. Option B

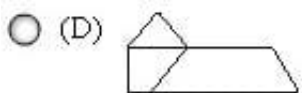
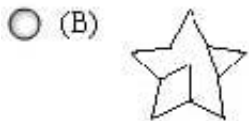
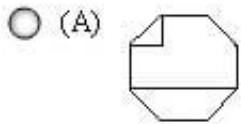
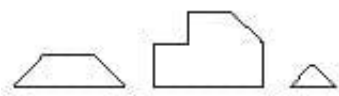
C. Option C

D. Option D

Correct Answer: A

QUESTION 11

Determine which of the choices best solves the problem shown in the first picture. The problem is presented in the first drawing and the remaining four drawings are possible solutions.



A. Option A

B. Option B

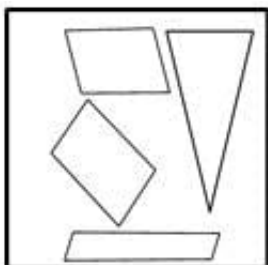
C. Option C

D. Option D

Correct Answer: A

QUESTION 12

Which figure best shows how the objects in the left box will appear if they are fit together?



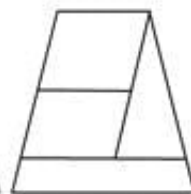
A



B



C



D

A. Option A

B. Option B

C. Option C

D. Option D

Correct Answer: B